

Question 33 of 64

Time remaining: 11:47

This sign indicates to the driver of a vehicle that ...

- A. the roadway to the left is not a through road.
- B. there is a T-junction ahead.
- C. only residents may turn left.

Loading...



◀ Previous

Review Questions

End Test

Next ▶

elo



Time remaining: 11:08

This sign indicates to a driver that a high speed exit is ... ahead.

A. 300 metres

B. 3 km

C. 30 metres



◀ Previous

Review Questions

End Test

Next ▶

elo



Question 47 of 64

Time remaining: 10:53

The appropriate reaction to this sign would be to ...

- A. keep left.
- B. turn right at the next intersection.
- C. be on the lookout for vehicles doing lane changes, especially from the left.



◀ Previous

Review Questions

End Test

Next ▶



Time remaining: 10:55

This road marking ...

A. shows that overtaking is not allowed.

B. divides the road into two lanes.

C. is only found in a parking area.



◀ Previous

Review Questions

End Test

Next ▶



1670000



Question 28 of 24

Time remaining: 10:51

This sign indicates to the driver of a vehicle that he/she ...

- A. may only pass the obstacle on the left-hand side.
- B. must turn left.
- C. must proceed to the left only.



◀ Previous Review Questions End Test Next ▶



time remaining: 12:34

What type of heavy motor vehicle or combinations of motor vehicles are permitted to travel at a maximum speed of 80 km/h?

A. Any heavy motor vehicle carrying goods

B. An articulated motor vehicle of which the gross combination weight of the tractor exceeds 9 000 kg.

C. Only vehicles carrying goods which belong to the government or police

◀ Previous

Review Questions

End Test

elo

time remaining: 12:23

When the driver sees this sign, he/she must ...

- A. turn left at the next road if he/she drives a delivery vehicle.
- B. turn left at the stop sign.
- C. turn left if he/she drives a goods vehicle.

◀ Previous

Review Questions

End Test

elo

Time remaining: 11:11

Trailers of which the gross vehicle mass does not exceed 10000 kg ...

- A. are not required to fit yellow reflective material to the vehicle.
- B. shall be fitted with yellow reflective material to the sides of the vehicle only.
- C. shall be fitted with yellow reflective material to the sides and the rear of the vehicle.

◀ Previous

Review Questions

End Test

Next ▶

elo



QUESTION 18 OF 24

Time remaining: 12:10

When flags have to be used to indicate projections ...

- A. they must be any size red flag.
- B. they may be any colour as long as they are visible.
- C. they must be red, and at least 300 mm x 300 mm.

◀ Previous

Review Questions

End Test

Next ▶



time remaining: 12:04

What are the requirements for a vehicle operated on a public road, with regard to excessive noise?

- A. Excessive noise is acceptable during festive seasons.
- B. No person shall operate a vehicle on a public road in such a manner that it causes any excessive noise.
- C. There are no requirements with regard to excessive noise on a public road.

◀ Previous

Review Questions

End Test

Next ▶

elo

time remaining: 12:07

A temporary sign ...

- A. is of less consequence to road users than a permanent sign.
- B. need not be taken seriously at all times of the day.
- C. has the same legal significance as a permanent sign.

◀ Previous

Review Questions

End Test

Next ▶

eio



10-1-2018



Time remaining: 10:49

This road marking indicates to drivers that ...

- A. drivers should proceed straight only if it is safe to do so.
- B. they may proceed only in the direction indicated by the arrow.**
- C. they may proceed to the left only if the lane to the left is clear.



◀ Previous Review Questions End Test Next ▶



QUESTION 20 OF 24
Time remaining: 11:51

What is the duty of a driver regarding pedestrians crossing a roadway within a pedestrian crossing?

- A. A driver must yield to all pedestrians wishing to cross or enter a public roadway.
- B. A driver must yield right of way to a pedestrian crossing a roadway within a pedestrian crossing.
- C. A driver must only stop for a pedestrian wishing to enter the roadway at a pedestrian signal.

◀ Previous

Review Questions

End Test

Next ▶

elo



What type of brakes must be fitted on a heavy motor vehicle?

A. Parking brake only.

B. Service brakes only.

C. Service brakes, parking brakes and emergency brakes.

◀ Previous

Review Questions

End Test

Next ▶

elo



time remaining: 12:00

If you have a driving licence and you are driving a vehicle, where should the licence document be?

- A. In a safe place at home and you should have a copy with you.
- B. In a safe place at home.
- C. With you in the vehicle.

← Previous

Review Questions

End Test

Next ►

elo



QUESTION 29 OF 34

Time remaining: 11:54

You may ...

- A. allow a passenger to give hand signals on behalf of the driver.
- B. allow a child to sit on a passenger's lap on the front seat.
- C. put your arm out of the window only to give legal hand signals.

◀ Previous

Review Questions

End Test

Next ▶

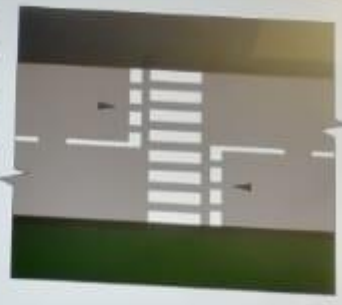
elo



Question 24 of 64
Time remaining: 11:45

Before this road marking one would usually find the following sign ...

- A. a marked pedestrian crossing ahead.
- B. level crossing ahead.
- C. you must be on the lookout for cyclists.



◀ Previous Review Questions End Test Next ▶



Question 24 of 54

Time remaining: 12:02

The driver of a vehicle shall not cross a public road unless...

- A. he/she looks into the rear view mirror, engages gears and accelerates, so that he/she can enter the road.
- B. he/she looks and signals his/her intentions and then moves onto the roadway.
- C. the road is clear of moving traffic for a sufficient distance to allow him / her to cross the road without obstructing or endangering any traffic.

◀ Previous

Review Questions

End Test

Next ▶



Time remaining: 11:05

This sign advises drivers of heavy vehicles ...

- A. to engage a lower gear to keep to a lower constant speed and to prevent brake overheating.
- B. that learner drivers may not drive there as it is too dangerous.
- C. that they should be travelling in the lowest gear.



◀ Previous

Review Questions

End Test

Next ▶

e10

time remaining: 10:22

What should the driver of a motor vehicle do when following another vehicle at night?

- A. Flash the main beam occasionally.
- B. Dip the main beam.
- C. Make sure the main-beam is on.

◀ Previous

Review Questions

End Test

Next ▶



Time remaining: 11:36

The lights of your vehicle parked on a public road between sunset and sunrise need not be kept lighted when the vehicle is parked ...

- (i) 10 m from a lighted street lamp.
- (ii) next to the roadway of the road.
- (iii) in a demarcated parking area.

SELECT THE CORRECT COMBINATION

A. Only (i) and (iii) are correct

B. All of the above are correct

C. Only (ii) and (iii) are correct

◀ Previous

Review Questions

End Test

Next ▶

eio



Question 13 of 14
Time remaining: 12:22

This type of sign is known as ...

- A. a regulatory sign.
- B. a warning sign.
- C. an information sign.

◀ Previous

Review Questions

End Test



100/1000

10/10/2011

OPERATION OF A VEHICLE

Time remaining: 10:25

You may not ...

- (i) run the engine of your vehicle unattended.
- (ii) use your vehicle without a cap on the fuel tank.
- (iii) spin the wheels of your vehicle when pulling off.

SELECT THE CORRECT COMBINATION

0/100

A. None of the above are allowed

B. Only (ii) is not allowed

C. Only (i) and (ii) are not allowed

◀ Previous

Review Questions

End Test

Next ▶

elo

time remaining: 11:59

To select a gear, you must use numbers ...

- A. 5 and 8
- B. 7 and 9
- C. 6 and 8



◀ Previous

Review Questions

End Test

Next ▶



time remaining: 11:48

The flag signal that is being shown, is instructing the driver to ...

- A. be careful of construction vehicles.
- B. proceed.
- C. stop and pass on the right side when it is safe to do so.



◀ Previous

Review Questions

End Test

Next ▶

elo



Time remaining: 11:17

This sign indicates to the driver of a vehicle that ...

- A. the minimum speed limit in the right-hand lane is temporarily 80 km per hour.
- B. the minimum speed limit in the right-hand lane is permanently 80 km per hour.
- C. the maximum speed limit in the right-hand lane is 80 km per hour.



◀ Previous

Review Questions

End Test

Next ▶

elo



Which statement is correct?

- A. A driver is not allowed to drive a motor vehicle whilst under the influence of alcohol.
- B. You may drive a vehicle if you have only drunk a bottle of wine.
- C. You may drive as long as you only drank beers.

◀ Previous

Review Questions

End Test

Next ▶

elo



The lights of your vehicle parked on a public road between sunset and sunrise need not be kept lighted when the vehicle is parked ...
(i) 10 m from a lighted street lamp.
(ii) next to the roadway of the road.
(iii) in a demarcated parking area.
SELECT THE CORRECT COMBINATION

- A. Only (i) and (iii) are correct
- B. All of the above are correct
- C. Only (ii) and (iii) are correct

◀ Previous Review Questions End Test Next ▶



What must you use to shift from one gear to another gear?

- A. Foot brake and gear lever
- B. Parking brake and the clutch
- C. Gear lever and the clutch

◀ Previous

Review Questions

End Test

Next ▶

elo



(i) 10 m from a lighted street lamp.
(ii) next to the roadway of the road.
(iii) in a demarcated parking area.
SELECT THE CORRECT COMBINATION

A. Only (i) and (iii) are correct

B. All of the above are correct

C. Only (ii) and (iii) are correct

◀ Previous

Review Questions

End Test

Next ▶

elo



time remaining: 10:41

This road marking which is next to the black arrow tells you that you ...

- A. you may stop on the red line.
- B. you may not stop there during selected periods indicated by another appropriate road sign.
- C. you may stop adjacent to a red line.



◀ Previous

Review Questions

End Test

Next ▶



Time remaining: 10:20

A safe following distance is so that when the vehicle in front of you suddenly stops, you can ...

A. swerve and stop next to it.

B. swerve and pass.

C. stop without swerving.

← Previous

Review Questions

End Test

time remaining: 11:43

This sign indicates to the driver of a vehicle that ...

- A. the roadway to the left is not a through road.
- B. there is a T-junction ahead.
- C. only residents may turn left.



◀ Previous

Review Questions

End Test

Next ▶

elo





Question 42 of 64

Time remaining: 11:10

Trailers of which the gross vehicle mass does not exceed 10000 kg ...

- A. are not required to fit yellow reflective material to the vehicle.
- B. shall be fitted with yellow reflective material to the sides of the vehicle only.
- C. shall be fitted with yellow reflective material to the sides and the rear of the vehicle.

Loading

◀ Previous

Review Questions

End Test

Next ▶

elo



time remaining: 10:35

Where do you find this sign?

- A. On a freeway, indicating dedicated exit lanes.
- B. On any public road indicating single exit lanes.
- C. Only in towns or suburbs.



◀ Previous Review Questions End Test Next ▶



time remaining: 11:15

When is overtaking prohibited?

What

- A. When approaching any place where passing could cause a hazard to traffic approaching from the opposite direction.
- B. When passing a school.
- C. When driving at night.

◀ Previous

Review Questions

End Test

Next ▶

elo



001-0000

001-0000

QUESTION 27 OF 28

Time remaining: 10:33

The following control assists the driver when changing gears:

- A. 10
- B. 9
- C. 8



◀ Previous

Review Questions

End Test

Next ▶



Time remaining: 11:14

When this sign is illuminated, it shows you that ...

- A. there is no throughway there.
- B. it is a traffic lane that vehicles may not enter.
- C. there is an unguarded railway crossing ahead.



◀ Previous

Review Questions

End Test

Next ▶

elo



Question 80 of 84

Time remaining: 10:26

This sign indicates to the driver that there ...

- A. are obstructions in the road for 1 km.
- B. are road works within 1 km.
- C. are obstructions to the road 1 km ahead that affect the traffic movement.



◀ Previous

Review Questions

End Test

Next ▶



10/7/2018

10/7/2018

Question 82 of 84

Time remaining: 10:25

How far may you park from the left edge of the roadway outside an urban area?


- A. Not more than 1 m from the edge of the roadway.
- B. A vehicle may not be parked in the roadway unless in a parking area.
- C. Not more than 450 mm from the edge of the roadway.

◀ Previous

Review Questions

End Test

Next ▶



Question 25 of 44

Time remaining: 10:31

This road marking warns the road user that ...

1231

- A. the right lane may be used by vehicles in opposite directions at different times.
- B. no overtaking is allowed.**
- C. the road will split.



◀ Previous

Review Questions

End Test

Next ▶

elo

time remaining: 10:37

This road marking warns the driver that ...

- A. there is a pedestrian crossing in the road.
- B. he/she should be on the lookout for a level crossing ahead.
- C. there is a speed hump in the road.



◀ Previous

Review Questions

End Test

Next ▶



Time remaining: 11:06

This sign advises drivers of heavy vehicles ...

- A. to engage a lower gear to keep to a lower constant speed and to prevent brake overheating.
- B. that learner drivers may not drive there as it is too dangerous.
- C. that they should be travelling in the lowest gear.



◀ Previous

Review Questions

End Test

Next ▶

elo

Time remaining: 12:39

Which one of the following statements is true?

29/181

- A. A heavy motor vehicle may not be used on a public road not fitted with a fuel cap.
- B. A heavy motor vehicle may be used on a public road with fuel cap, if the tank is not full and the opening is closed with
- C. A heavy motor vehicle may be used on a public road with cap, as long as the driver will not be travelling fast.

◀ Previous

Review Questions

End Test

elo

Time remaining: 11:37

This sign informs us that ...

- A. buses may park there.
- B. parking is restricted to 12 hours.
- C. parking space may be used after 12 noon only.



◀ Previous Review Questions End Test Next ▶



Time remaining: 12:45

Which of the following statements is correct? A silencer

DR114

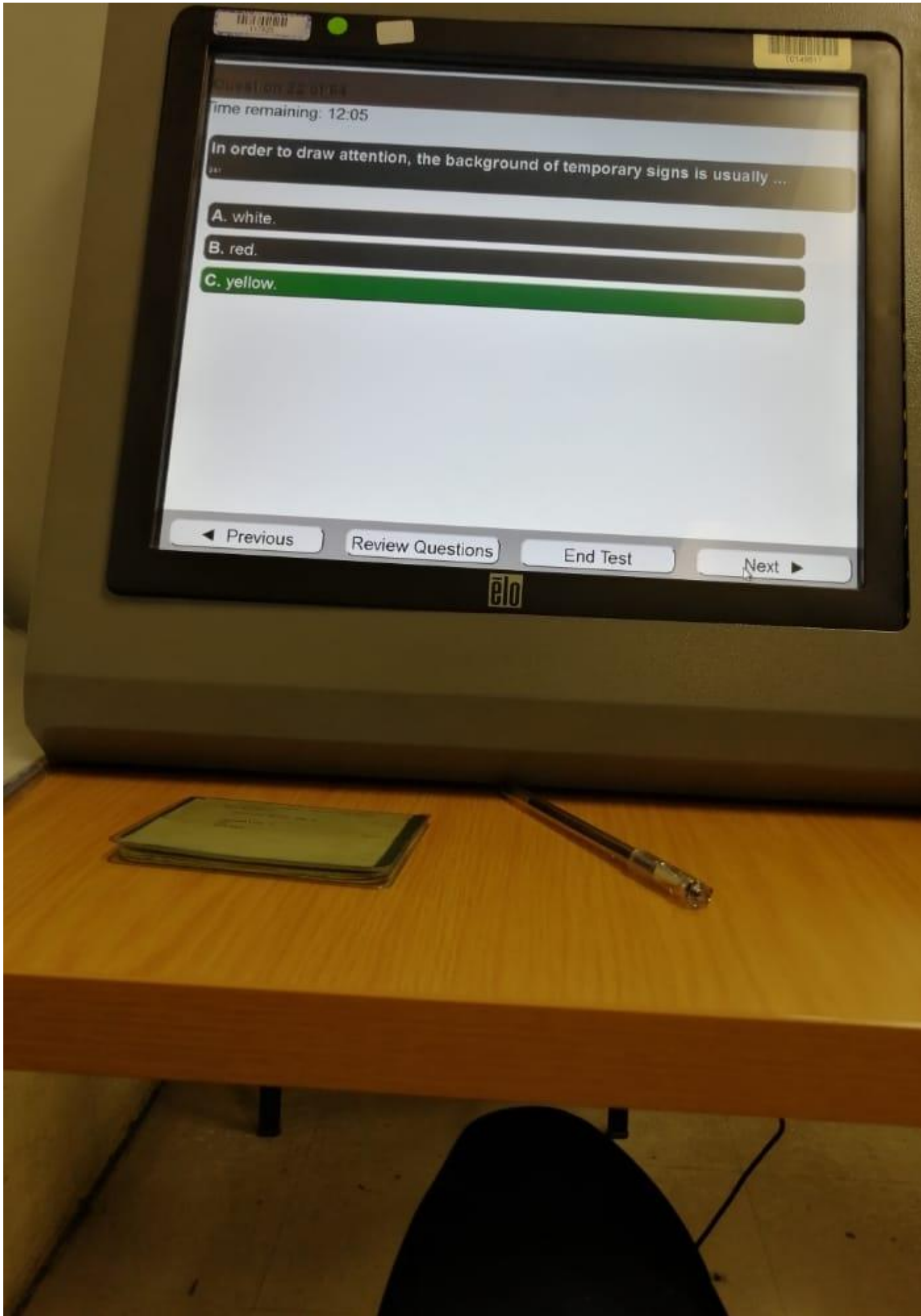
- A. must be fitted to a vehicle to restrict engine noise to acc
- B. with a small hole is acceptable.
- C. need not be fitted.

◀ Previous

Review Questions

End Test





Question 22 of 24

Time remaining: 12:05

In order to draw attention, the background of temporary signs is usually ...

A. white.

B. red.

C. yellow.

◀ Previous

Review Questions

End Test

Next ▶



time remaining: 12:18

This sign shows you that ...

A. there is a camera monitoring the intersection at the traffic light.

B. there is a photographic studio.

C. the taking of photographs is not permitted.

◀ Previous

Review Questions

End Test



Time remaining: 11:41

Before this road marking one would usually find the following sign ...

- A. a marked pedestrian crossing ahead.
- B. level crossing ahead.
- C. you must be on the lookout for cyclists.



◀ Previous

Review Questions

End Test

Next ▶



Question 26 of 64

Time remaining: 11:55

Your vehicle's headlights must be switched on ...
(i) at any time of the day when you cannot see persons and vehicles 150 m in front of you.
(ii) from sunset to sunrise.
(iii) when it rains and you cannot see vehicles 100 m in front of you.
SELECT THE CORRECT COMBINATION.

- A. Only (i) and (ii) are correct
- B. All of the above are correct**
- C. Only (ii) is correct

◀ Previous Review Questions End Test Next ▶



Question 8 of 54

Time remaining: 12:28

What is the maximum period of time that a vehicle may be on a road outside urban areas?

A. Seven days

B. 24 hours

C. 48 hours

◀ Previous

Review Questions

End Test



Time remaining: 12:52

When driving a motor vehicle, what is the minimum safe distance to maintain when following another vehicle?

20187

A. A driver may drive as close as possible so that overtaking is possible.

B. Five metres at 100 km/h.

C. A distance determined by means of the two second rule.



Review Questions

End Test



Time remaining: 12:43

This sign shows the driver of the vehicle that ...

- A. the road turns to the right only.
- B. there is an alternative route at the next intersection to the right.**
- C. at the next intersection the driver must turn right.

◀ Previous

Review Questions

End Test



time remaining: 12:20

Control no. 5 is the ...

A. steering wheel.

B. accelerator.

C. direction indicator.

◀ Previous

Review Questions

End Test

elo

Question 11 of 64

Time remaining: 12:25

When are you allowed to drive in the section left of the yellow line below.

- (i) Any time when you want to allow another vehicle to pass
 - (ii) In daytime when you want to allow another vehicle to pass
 - (iii) When on a freeway with 2 lanes in both directions, you are driving faster than 120 km/h.
 - (iv) When you have a flat tyre and you want to park there temporarily
- SELECT THE CORRECT COMBINATION**

- A. Only (i), (iii) and (iv) are correct
- B. All of the above are correct
- C. Only (ii) and (iv) are correct**

◀ Previous

Review Questions

End Test



time remaining: 12:27

Which controls must you use when there is a sharp turn

A. 3, 6, 5, 9 and 10 only

B. 1, 3, 5, 6 and 8 only

C. 1, 3, 4, 6, 8, 9 and 10 only

◀ Previous

Review Questions

End Test

elo

time remaining: 12:36

When control number 9 is used, the distance it takes the vehicle to stop it is ...

- (i) longer on a wet road than on a dry road.
- (ii) longer if the vehicle is travelling at a higher speed.
- (iii) longer if the vehicle is loaded.

SELECT THE CORRECT COMBINATION

A. Only (i) is correct

B. None of the above are correct

C. All of the above are correct

◀ Previous

Review Questions

End Test



Time remaining: 12:32

Where may you legally stop with your vehicle?

A. 4 m from a tunnel.

B. 6 m from a railway crossing reserve.

C. 5 m from a pedestrian crossing.

◀ Previous

Review Questions

End Test

elo

QUESTION 17 OF 24
Time remaining: 12:14

Which statement is correct?

- A. A heavy motor vehicle may not be used on a public road if it is fitted with a spot lamp which can emit a beam of light that can be deflected in any direction.
- B. A heavy motor vehicle may be fitted with a spot lamp to add an extra beam when it is raining.
- C. A heavy motor vehicle may be fitted with a spot lamp to warn others of road works.

◀ Previous

Review Questions

End Test

Next ▶

elo

Question 20 of 64

Time remaining: 12:09

What is the requirement of a driver when entering a public road?

- A. The driver must always stop before entering or crossing a public road.
- B. The driver shall not enter a public road unless it can be done safely for him/herself and other traffic.
- C. The driver does not always have to slow down before entering or crossing a public road.

◀ Previous Review Questions End Test Next ▶



Time remaining: 12:41

The following vehicles are not allowed on a freeway?

A. A tractor, except when it is used in connection with construction or maintenance of the freeway.

B. A vehicle driven by a learner driver.

C. A vehicle used for the conveyance of school children.

◀ Previous

Review Questions

End Test



10-1-2018
11:52

10148512

Question 19 of 64
Time remaining: 12:12

When you stop on a steep incline and want to prevent the vehicle from rolling backwards, you use control(s) no. _____

- A. 6 + 9
- B. 7**
- C. 6 + 7



◀ Previous Review Questions End Test Next ▶

elo



Time remaining: 12:16

When may you stop in front of this sign?

- A. Never.
- B. Only when you want to look at the scenery.
- C. Only when picking up passengers.

◀ Previous

Review Questions

End Test

elo

Question 27 of 54
Time remaining: 11:57

If you only have a learner's licence for a heavy motor vehicle, ...
(i) then there must be someone with you in the vehicle with the same driving licence.
(ii) you are not allowed to drive on a freeway.
(iii) no passengers are allowed with you in the vehicle.
SELECT THE CORRECT COMBINATION

- A. All the above are correct
- B. Only (i) is correct**
- C. Only (i) and (iii) are correct

◀ Previous Review Questions End Test Next ▶



Time remaining: 11:50

When travelling on this secondary road, you ...

- A. only have to stop if traffic from the left or right is approaching.
- B. do not have right of way and you have to stop.
- C. have right of way.



◀ Previous

Review Questions

End Test

Next ▶

elo

