

Question 37 of 64

Time remaining: 17:59

How far may you park from the left edge of the roadway outside an urban area?

- A. Not more than 450 mm from the edge of the roadway
- B. A vehicle may not be parked in the roadway unless in a parking area
- C. Not more than 1 m from the edge of the roadway

◀ Previous

Review Questions

End Test

Next

Question 46 of 64

Time remaining: 17:37

Which of the following statements is correct? A silencer ...

20154

- A. need not be fitted.
- B. with a small hole is acceptable.
- C. must be fitted to a vehicle to restrict engine noise to acceptable levels.

◀ Previous

Review Questions

End Test

Next ▶

Question 44 of 64

Time remaining: 17:42

This sign indicates ...

A. how much toll you will have to pay.

B. which way all vehicles have to go.

C. a toll road and an alternative for a toll road.

N3  Harrismith 10  
R103  Harrismith 12

◀ Previous

Review Questions

End Test

Next ▶

Question 32 of 64

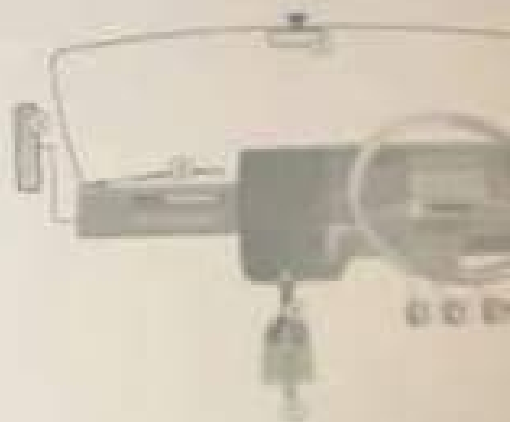
Time remaining: 18:13

The following control is used to select the appropriate gear of the vehicle:

A. 8

B. 7

C. 6



◀ Previous

Review Questions

End Test

Next ▶

Question 21 of 64

Time remaining: 18:47

If you only have a learner's licence for a heavy motor vehicle, ...  
then there must be someone with you in the vehicle with the same driving licence.

- (i) you are not allowed to drive on a freeway.
- (j) no passengers are allowed with you in the vehicle.

**SELECT THE CORRECT COMBINATION**

A. All the above are correct

B. Only (i) is correct

Question 27 of 64

Time remaining: 18:28

When is overtaking prohibited?


- A. When approaching any place where passing could cause a hazard to traffic approaching from the opposite direction.
- B. When passing a school.
- C. When driving at night.

Question 41 of 64

Time remaining: 17:50

Before this road marking one would usually find the following sign ...

- A. a marked pedestrian crossing ahead.
- B. you must be on the lookout for cyclists.
- C. level crossing ahead.



◀ Previous

Review Questions

End Test

Next ▶

49:59

heavy motor vehicle must be equipped with an efficient exhaust silencer, which

- A. does not have to be maintained, as long as it does not make a noise.
- B. must be so maintained that it does not cause a vibration in the cab.
- C. must be so maintained that the exhaust gas or smoke does not leak into the driving cab or passengers compartment of the vehicle.

Review Questions

End Test



Question 23 of 64

Time remaining: 18:41

What should a driver consider when following another vehicle?

A. The driver should follow at a safe distance and be able to stop the vehicle safely in an emergency situation or should the vehicle in front slow down or stop.

B. The driver should be able to see the rear tyres of the vehicle in front.

C. The driver should follow another vehicle keeping three car lengths behind.

Which one of the following statements is correct?

- A. Pedal cycles are not permitted on a freeway.
- B. Racing cycles may be ridden on a freeway during the day only.
- C. Pedal cycles may only be ridden on the shoulder of the freeway.

On a two-lane roadway, on which side of the roadway may you drive if the roadway is wide enough without endangering other traffic?

- A. A driver shall drive on the left side of the roadway.
- B. A driver may encroach or drive on the right-hand of a roadway if the car in front is driving slowly.
- C. A driver may drive on the right-hand side provided there is no traffic.

What type of brakes must be fitted on a heavy motor vehicle?

- A. Service brakes, parking brakes and emergency brakes.
- B. Parking brake only.
- C. Service brakes only.

Question 9 of 64

Time remaining: 19:19

The use of a temporary sign implies that for some reason ...

1. circumstances on the roadway are not normal.

3. traffic has to move slowly.

2. the rules of the road do not apply.

◀ Previous

Review Questions

End Test

Next ▶

Question 53 of 64

Time remaining: 17:18

This road marking tells you that ...

A. you may never park next to the road indicated by the black arrow.

B. you may not stop next to the road over there.

C. the road is under construction.



◀ Previous

Review Questions

End Test

Next ▶

When the driver sees this sign, he/she must ...

A. turn left at the next road if he/she drives a delivery vehicle.

B. turn left if he/she drives a goods vehicle.

C. turn left at the stop sign.



What type of heavy motor vehicle or combinations of motor vehicles are restricted to travel at a maximum speed of 80 km/h?

- A. An articulated motor vehicle of which the gross combination mass of truck-tractor exceeds 9 000 kg.
- B. Only vehicles carrying goods which belong to the government and traffic police
- C. Any heavy motor vehicle carrying goods



Question 7 of 64

Time remaining: 19:24

The driver of a vehicle shall not cross a public road unless...

A. he/she looks and signals his/her intentions and then moves onto the roadway.

B. the road is clear of moving traffic for a sufficient distance to allow him / her to cross the road without obstructing or endangering any traffic.

C. he/she looks into the rear view mirror, engages gears and accelerates, so that he/she can enter the road.

◀ Previous

Review Questions

End Test

Next ▶

What is the duty of a driver when re-filling the fuel tank with petrol or inflammable fuel?

- A. The driver may not cause or allow the engine to run whilst petrol or other inflammable fuel is being transferred to the fuel tank.
- B. He/she may only allow the engine to run if diesel is being transferred to the fuel tank.
- C. He/she may start the engine whilst petrol or other inflammable fuel is being transferred to check if the fuel tank is full.

What is the function of a clutch?

- A. It is used to disconnect the engine from the transmission.
- B. It is used to reduce the speed of a vehicle.
- C. It is used to freewheel down a hill.

Question 38 of 64

Time remaining: 17:57

This sign shows to riders of motor cycles that ...

A. they have preference in that part of the road.

B. they must use that part of the road.

C. there is parking for motor cycles there.



◀ Previous

Review Questions

End Test

Next ▶

This sign shows the driver that ...

A. motor vehicles may not overtake goods vehicles.

B. a goods vehicle may not overtake any other vehicle.

C. there may not be any overtaking by goods vehicles.



◀ Previous

Review Questions

End Test

Next ▶

When approaching this sign, the driver knows that ...

A. a lane is added to the left of a two-way roadway.

B. the people driving on the left side of the road must turn left.

C. vehicles may be overtaken on the left side from there on.



A. has the same legal significance as a permanent sign.

B. need not be taken seriously at all times of the day.

C. is of less consequence to road users than a permanent sign.

◀ Previous

Review Questions

End Test

Next ▶

This signal indicates that ...

- A. this lane is for fast moving traffic only.
- B. you may drive there.
- C. this lane is for slow moving traffic only.





Question 48 of 64

Time remaining: 17:32

This type of sign is known as ...

A. a regulatory sign.

B. a warning sign.

C. an information sign.



◀ Previous

Review Questions

End Test

Next

This sign shows the driver of the vehicle that ...

A. at the next intersection the driver must turn right.

B. the road turns to the right only.

C. there is an alternative route at the next intersection to the right.



Question 22 of 64

Time remaining: 18:44

When moving off from a stationary position at the side of the road, what is the responsibility of the driver?

A. The driver must ensure that it is safe and that he/she will not interfere with traffic approaching from any direction.

B. The driver must join other traffic as quickly as possible.

C. The driver must indicate his/her intention and then move off.

Question 51 of 64

Time remaining: 17:24

This sign indicates to the driver that there ...

A. are obstructions to the road 1 km ahead that affect the traffic movement.

B. are obstructions in the road for 1 km.

C. are road works within 1 km.



Question 56 of 64

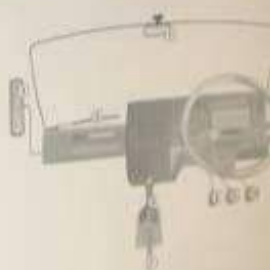
Time remaining: 17:11

The following control is used to change the direction of the vehicle:

A. 6

B. 4

C. 5



◀ Previous

Review Questions

End Test

Next ▶

When driving a motor vehicle, what is the minimum safe following distance to maintain when following another vehicle?

- A. A distance determined by means of the two second rule.
- B. A driver may drive as close as possible so that overtaking will be easier.
- C. Five metres at 100 km/h.

Question 60 of 64

Time remaining: 17:00

The appropriate reaction to this sign is to ...

A. stop, as the road is closed.

B. turn around as the road ends.

C. slow down and prepare to stop if necessary.



◀ Previous

Review Questions

End Test

Next ▶

Question 61 of 64

Time remaining: 16:57

Trailers of which the gross vehicle mass does not exceed 10000 kg ...

00:00:00

- A. shall be fitted with yellow reflective material to the sides and the rear of the vehicle.
- B. shall be fitted with yellow reflective material to the sides of the vehicle only.
- C. are not required to fit yellow reflective material to the vehicle.

◀ Previous

Review Questions

End Test

Next ▶



You may not ...

- (i) run the engine of your vehicle unattended.
- (ii) use your vehicle without a cap on the fuel tank.
- (iii) spin the wheels of your vehicle when pulling off.

SELECT THE CORRECT COMBINATION

A. Only (i) and (ii) are not allowed

B. Only (ii) is not allowed

C. None of the above are allowed

49.55

What type of heavy motor vehicle or combinations of motor vehicles are restricted to travel at a maximum speed of 80 km/h?

A. Any heavy motor vehicle carrying goods

B. Only vehicles carrying goods which belong to the government and traffic police

C. An articulated motor vehicle of which the gross combination mass of truck-tractor exceeds 9 000 kg.

◀ Previous

Review Questions

End Test

Question 59 of 64

Time remaining: 17:04

When the robot is red and the red arrow flashes to the left as indicated in the picture, it shows you that ...

A. you don't have to stop and you may just turn left.

B. you must stop behind the line and proceed left if it is safe to do so even if the red light is on.

C. you must slow down and then turn left without yielding to other traffic.



◀ Previous

Review Questions

End Test

Next ▶

Which statement is correct?

A. A heavy motor vehicle may not be used on a public road if it is fitted with a spot lamp which can emit a beam of light that can be deflected in any direction.

B. A heavy motor vehicle may be fitted with a spot lamp to warn others of road works.

C. A heavy motor vehicle may be fitted with a spot lamp to add an extra beam when it is raining.

Question 15 of 64

Time remaining: 19:04

In order to draw attention, the background of temporary signs is usually ...

A. white.

B. yellow.

C. red.

This road marking warns you that ...

- A. you will have to change lanes ahead.
- B. a railway line will be crossing the road at the same level.
- C. you may not enter this parking area.



Question 52 of 64

Time remaining: 17:21

What will this road marking indicate to the driver?

A. No overtaking is permitted.

B. Lanes are reducing from the right.

C. The vehicle in the right hand lane has right of way.



When seeing this sign the driver knows that he/she must ..

- A. proceed on the left side of the road.
- B. keep in the left lane only.
- C. pass to the left of the obstacle on which the sign has been placed.





This sign indicates to the driver of a vehicle that ...

A. the maximum speed limit in the right-hand lane is 80 km per hour.

B. the minimum speed limit in the right-hand lane is permanently 80 km per hour.

C. the minimum speed limit in the right-hand lane is temporarily 80 km per hour.



What is the requirement regarding noise caused by a heavy motor vehicle?

- A. A person may operate a vehicle causing excessive noise, but only at night.
- B. No person shall operate a vehicle on a public road in such a manner that it causes excessive noise.
- C. A person may operate a vehicle causing excessive noise outside town.

◀ Previous

Review Questions

End Test

Next ▶

Question 36 of 64

Time remaining: 18:02

Which controls must you use when there is a sharp turn in the road?

A. 1, 3, 5, 6 and 8 only

B. 3, 6, 5, 9 and 10 only

C. 1, 3, 4, 6, 8, 9 and 10 only



The lights of your vehicle parked on a public road between sunset and sunrise need not be kept lighted when the vehicle is parked ...

- (i) 10 m from a lighted street lamp.
- (ii) next to the roadway of the road.
- (iii) in a demarcated parking area.

**SELECT THE CORRECT COMBINATION**

A. Only (i) and (iii) are correct

B. Only (ii) and (iii) are correct

C. All of the above are correct

When is it permissible to park in a "no stopping" area?

A. Parking is permissible, however, only stopping is not permissible.

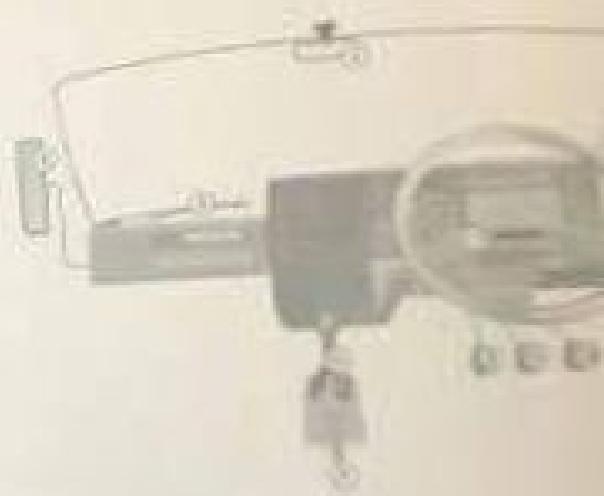
B. Only if no other parking area is available.

C. It is not permissible to park where stopping is not permitted.

When control number 9 is used, the distance it takes the driver of a motor vehicle to stop it is ...  
(i) longer on a wet road than on a dry road.  
(ii) longer if the vehicle is travelling at a higher speed.  
(iii) longer if the vehicle is loaded.

SELECT THE CORRECT COMBINATION

- A. All of the above are correct
- B. None of the above are correct
- C. Only (i) is correct



A. the taking of photographs is not permitted.

B. there is a photographic studio.

C. there is a camera monitoring the intersection at the traffic light.



◀ Previous

Review Questions

End Test

Next ▶

This sign shows you that ...

- A. you have to turn off to a weigh bridge.
- B. there is a roadway shop to your left.
- C. you have to turn left there if your brakes failed and you need to stop.



◀ Previous

Review Questions

End Test

Next



When may you stop in front of this sign?

- A. Only when you want to look at the scenery.
- B. Only when picking up passengers.
- C. Never.



A. you may use this lane if you want to pick up people.

B. this lane is for the exclusive use of buses.

C. any vehicle dropping or picking up passengers may use this lane.



Question 44 of 64

Time remaining: 17:42

This sign indicates ...

A. how much toll you will have to pay.

B. which way all vehicles have to go.

C. a toll road and an alternative for a toll road.

N3  Harrismith 10


R103  Harrismith 1


← Previous

Review Questions

End Test

Test

 Like

 Comment

Question 5 of 64

Time remaining: 19:30

Where may you legally stop with your vehicle?

A. 4 m from a tunnel.

B. 6 m from a railway crossing reserve.

C. 5 m from a pedestrian crossing.

◀ Previous

Review Questions

End Test

Next

Question 46 of 64

Time remaining: 17:37

Which of the following statements is correct? A silencer ...

R154


- A. need not be fitted.
- B. with a small hole is acceptable.
- C. must be fitted to a vehicle to restrict engine noise to acceptable levels.

◀ Previous

Review Questions

End Test

Next ▶



Like



Comment



Question 43 of 64

Time remaining: 17:45

What is the duty of a driver when re-filling the fuel tank with petrol or inflammable fuel?

- A. The driver may not cause or allow the engine to run whilst petrol or other inflammable fuel is being transferred to the fuel tank.
- B. He/she may only allow the engine to run if diesel is being transferred to the fuel tank.
- C. He/she may start the engine whilst petrol or other inflammable fuel is being transferred to check if the fuel tank is full.

◀ Previous

Review Questions

End Test

Next

When approaching this sign, the driver must ...

25/334

- A. know that he is warned of a stop ahead.
- B. stop behind the stop line and give right of way to vehicles from the right.
- C. yield and carry on when safe to do so.



Question 47 of 64

Time remaining: 17:35

This sign indicates ...

- A. that all traffic must turn right.
- B. the presence of a bridge.
- C. the direction to a freeway.



◀ Previous

Review Questions

End Test

Next



Which statement is correct?

26/28

A. A heavy motor vehicle may be fitted with a spot lamp to add an extra beam when it is raining.

B. A heavy motor vehicle may be fitted with a spot lamp to warn others of road works.

C. A heavy motor vehicle may not be used on a public road if it is fitted with a spot lamp which can emit a beam of light that can be deflected in any direction.

Question 59 of 64

Time remaining: 17:04

When the robot is red and the red arrow flashes to the left as indicated in the picture, it shows you that ...

- A. you don't have to stop and you may just turn left.
- B. you must stop behind the line and proceed left if it is safe to do so even if the red light is on.
- C. you must slow down and then turn left without yielding to other traffic.



◀ Previous

Review Questions

End Test

Next ▶

Question 32 of 64

Time remaining: 18:13

The following control is used to select the appropriate gear of the vehicle:

A. 8

B. 7

C. 6



◀ Previous

Review Questions

End Test

Next

Question 57 of 64

Time remaining: 17:09

You may not ...

- (i) run the engine of your vehicle unattended.
- (ii) use your vehicle without a cap on the fuel tank.
- (iii) spin the wheels of your vehicle when pulling off.

SELECT THE CORRECT COMBINATION

A. Only (i) and (ii) are not allowed

B. Only (ii) is not allowed

C. None of the above are allowed

◀ Previous

Review Questions

End Test

Next

Question 60 of 64

Time remaining: 17:00

The appropriate reaction to this sign is to ...

- A. stop, as the road is closed.
- B. turn around as the road ends.
- C. slow down and prepare to stop if necessary.



◀ Previous

Review Questions

End Test

Next



Like



Comment



Question 29 of 64

Time remaining: 18:22

This sign warns a driver that ...

- A. a side road junction from the right is ahead.
- B. a skew T-junction is ahead.
- C. a T-junction is ahead.



◀ Previous

Review Questions

End Test

Next

👍 Like

💬 Comment

Question 39 of 64

Time remaining: 17:55

This road marking warns you that ...

- A. you will have to change lanes ahead.
- B. a railway line will be crossing the road at the same level.**
- C. you may not enter this parking area.



◀ Previous

Review Questions

End Test

Next

Question 41 of 64

Time remaining: 17:50

Before this road marking one would usually find the following sign ...

- A. a marked pedestrian crossing ahead
- B. you must be on the lookout for cyclists
- C. level crossing ahead.



◀ Previous

Review Questions

End Test

Next

👍 Like

💬 Comment





Question 51 of 64

Time remaining: 17:24

This sign indicates to the driver that there ...

- A. are obstructions to the road 1 km ahead that affect the traffic movement.
- B. are obstructions in the road for 1 km.
- C. are road works within 1 km.



◀ Previous

Review Questions

End Test

Next

Question 56 of 64

Time remaining: 17:11

Which of the following controls is used to change the direction of the vehicle:

A. 6

B. 4

C. 5



◀ Previous

Review Questions

End Test

Next

Question 17 of 64

Time remaining: 18:59

The lights of your vehicle parked on a public road between sunset and sunrise need not be kept lighted when the vehicle is parked ...

- (i) 10 m from a lighted street lamp.
- (ii) next to the roadway of the road.
- (iii) in a demarcated parking area.

**SELECT THE CORRECT COMBINATION**

- A. Only (i) and (iii) are correct
- B. Only (ii) and (iii) are correct
- C. All of the above are correct**

◀ Previous

Review Questions

End Test

Next

Question 23 of 64

Time remaining: 18:41

What should a driver consider when following another vehicle?

A. The driver should follow at a safe distance and be able to stop the vehicle safely in an emergency situation or should the vehicle in front slow down or stop.

B. The driver should be able to see the rear tyres of the vehicle in front.

C. The driver should follow another vehicle keeping three car lengths behind.

◀ Previous

Review Questions

End Test

Next ▶

Question 26 of 64

Time remaining: 18:31

temporary sign ...

- A. has the same legal significance as a permanent sign
- B. need not be taken seriously at all times of the day
- C. is of less consequence to road users than a permanent sign

◀ Previous

Review Questions

End Test

Next



Question 21 of 64

Time remaining: 18:47

If you only have a learner's licence for a heavy motor vehicle, ...  
then there must be someone with you in the vehicle with the same driving licence.

- (i) you are not allowed to drive on a freeway.
- (ii) no passengers are allowed with you in the vehicle.

SELECT THE CORRECT COMBINATION

- A. All the above are correct
- B. Only (i) is correct**
- C. Only (i) and (ii) are correct

◀ Previous

Review Questions

End Test

Next ▶

Question 9 of 64

Time remaining: 19:19

The use of a temporary sign implies that for some reason ...

A. circumstances on the roadway are not normal

B. traffic has to move slowly

C. the rules of the road do not apply

◀ Previous

Review Questions

End Test

Next

Question 51 of 64

Time remaining: 17:24

This sign indicates to the driver that there ...

- A. are obstructions to the road 1 km ahead that affect the traffic movement.
- B. are obstructions in the road for 1 km.
- C. are road works within 1 km.



◀ Previous

Review Questions

End Test

Next

👍 Like

💬 Comment



Question 16 of 64

Time remaining: 19:01

When control number 9 is used, the distance it takes the driver of a motor vehicle to stop it is ...

- (i) longer on a wet road than on a dry road.
- (ii) longer if the vehicle is travelling at a higher speed.
- (iii) longer if the vehicle is loaded.

SELECT THE CORRECT COMBINATION

A. All of the above are correct

B. None of the above are correct

C. Only (i) is correct



◀ Previous

Review Questions

End Test

Next ▶

Question 63 of 64

Time remaining: 16:52

This sign indicates to a driver that a high speed exit is ... ahead.

- A. 1 km
- B. 100 meters
- C. 10 meters



◀ Previous

Review Questions

End Test

Next

Question 12 of 64

Time remaining: 19:12

When approaching this sign, the driver knows that ...

A. a lane is added to the left of a two-way roadway

B. the people driving on the left side of the road must turn left.

C. vehicles may be overtaken on the left side from there on.



◀ Previous

Review Questions

End Test

👍 Like

💬 Comment

Question 6 of 64

Time remaining: 19:28

When driving a motor vehicle, what is the minimum safe following distance to maintain when following another vehicle?

**A. A distance determined by means of the two second rule**

B. A driver may drive as close as possible so that overtaking will be easier.

C. Five metres at 100 km/h.

◀ Previous

Review Questions

End Test

Next

What is the purpose of an accelerator?

100%

- A. it is used to turn a vehicle in an emergency.
- B. It is used to stop a vehicle.
- C. It is used to increase or decrease the speed of a vehicle.

◀ Previous

Review Questions

End Test

Next ▶

Which is the correct answer considering this sign?

25/42

A. When the red man is glowing it means that pedestrians have priority.

B. When the green man is glowing it means that pedestrians should run across the street as fast as they can.

C. When the green man is glowing, pedestrians may walk across and when the red light is glowing, pedestrians may not walk across.





Question 14 of 64

Time remaining: 19:06

On which side of the roadway may you drive if the roadway is wide enough without endangering other traffic?

- A. A driver shall drive on the left side of the roadway.
- B. A driver may encroach or drive on the right-hand of a roadway if the car in front is driving slowly.
- C. A driver may drive on the right-hand side provided there is no traffic.

◀ Previous

Review Questions

End Test

Next ▶

When the driver sees this sign, he/she must ...

A. turn left at the next road if he/she drives a delivery vehicle.

B. turn left if he/she drives a goods vehicle.

C. turn left at the stop sign.





Question 40 of 64

Time remaining: 17:52

What type of heavy motor vehicle or combinations of motor vehicles are restricted to travel at a maximum speed of 80 km/h?

- A. An articulated motor vehicle of which the gross combination mass of truck or tractor exceeds 9 000 kg
- B. Only vehicles carrying goods which belong to the government and traffic police
- C. Any heavy motor vehicle carrying goods

◀ Previous

Review Questions

End Test

👍 Like

💬 Comment

Question 46 of 64

Time remaining: 17:37

Which of the following statements is correct? A silencer ...

A. need not be fitted.

B. with a small hole is acceptable.

C. must be fitted to a vehicle to restrict engine noise to acceptable levels.

◀ Previous

Review Questions

End Test

👍 Like

💬 Comment

Question 37 of 64

Time remaining: 17:59

How far may you park from the left edge of the roadway outside an urban area?

- A. Not more than 450 mm from the edge of the roadway.
- B. A vehicle may not be parked in the roadway unless in a parking area.
- C. Not more than 1 m from the edge of the roadway.

◀ Previous

Review Questions

End Test

Next

Question 54 of 64

Time remaining: 17:16

What is the requirement regarding noise caused by a heavy motor vehicle?

- A. A person may operate a vehicle causing excessive noise, but only at night.
- B. No person shall operate a vehicle on a public road in such a manner that it causes excessive noise.
- C. A person may operate a vehicle causing excessive noise outside town.

◀ Previous

Review Questions

End Test

Next

👍 Like

💬 Comment

Question 55 of 64

Time remaining: 17:13

To select a gear, you must use numbers ...

**A. 6 and 8**

B. 5 and 8

C. 7 and 9



◀ Previous

Review Questions

End Test

Test

Question 15 of 64

Time remaining: 19:04

In order to draw attention, the background of temporary signs is usually ...

A. white.

B. yellow.

C. red.

◀ Previous

Review Questions

End Test

Next ▶

👍 Like

💬 Comment



Question 22 of 64

Time remaining: 18.44

When moving off from a stationary position at the side of the road, what is the responsibility of the driver?

- A. The driver must ensure that it is safe and that he/she will not interfere with traffic approaching from any direction.
- B. The driver must join other traffic as quickly as possible.
- C. The driver must indicate his/her intention and then move off.

◀ Previous

Review Questions

End Test

Next ▶

Question 52 of 64

Time remaining: 17:21

What will this road marking indicate to the driver?

- A. No overtaking is permitted.
- B. Lanes are reducing from the right.**
- C. The vehicle in the right hand lane has right of way.



◀ Previous

Review Questions

End Test

👍 Like

💬 Comment



Question 62 of 64

Time remaining: 16:55

When seeing this sign the driver knows that he/she must ...

- A. proceed on the left side of the road.
- B. keep in the left lane only**
- C. pass to the left of the obstacle on which the sign has been placed.



◀ Previous

Review Questions

End Test

Next

9:55

What type of heavy motor vehicle or combinations of motor vehicles are restricted to travel at a maximum speed of 80 km/h?

A. Any heavy motor vehicle carrying goods

B. Only vehicles carrying goods which belong to the government and traffic police

C. An articulated motor vehicle of which the gross combination mass of tractor and trailer exceeds 9 000 kg

← Previous

Review Questions

End Test

Question 45 of 64

Time remaining: 17:40

What type of brakes must be fitted on a heavy motor vehicle?

- A. Service brakes, parking brakes and emergency brakes.
- B. Parking brake only.
- C. Service brakes only.

◀ Previous

Review Questions

End Test

Next

Question 53 of 64

Time remaining: 17:16

This road marking tells you that ...

- A. you may never park next to the road indicated by the black arrow
- B. you may not stop next to the road over there.
- C. the road is under construction



◀ Previous

Review Questions

End Test

Next

Question 7 of 64

Time remaining: 19:24

The driver of a vehicle shall not cross a public road unless...

- A. he/she looks and signals his/her intentions and then moves onto the roadway.
- B. the road is clear of moving traffic for a sufficient distance to allow him / her to cross the road without obstructing or endangering any traffic.**
- C. he/she looks into the rear view mirror, engages gears and accelerates, so that he/she can enter the road.

◀ Previous

Review Questions

End Test

24/30

19:59

heavy motor vehicle must be equipped with an efficient exhaust silencer, which


A. does not have to be maintained, as long as it does not make a noise.


B. must be so maintained that it does not cause a vibration in the cab

C. must be so maintained that the exhaust gas or smoke does not leak into the driving cab or passengers compartment of the vehicle.

Review Questions

End Test

 Like

 Comment



Question 49 of 64

Time remaining: 17:30

What is the function of a clutch?

- A. It is used to disconnect the engine from the transmission
- B. It is used to reduce the speed of a vehicle.
- C. It is used to freewheel down a hill.


◀ Previous

Review Questions

End Test

Next

 Like

 Comment

Question 10 of 64

Time remaining: 19:16

Which statement is correct?

- A. A heavy motor vehicle may not be used on a public road if it is fitted with a spot lamp which can emit a beam of light that can be deflected in any direction.
- B. A heavy motor vehicle may be fitted with a spot lamp to warn others of road works.
- C. A heavy motor vehicle may be fitted with a spot lamp to add an extra beam when it is raining.

◀ Previous

Review Questions

End Test



Question 64 of 64

Time remaining: 16:49

When is it permissible to park in a "no stopping" area?

- A. Parking is permissible, however, only stopping is not permissible
- B. Only if no other parking area is available
- C. It is not permissible to park where stopping is not permitted

◀ Previous

Review Questions

End Test

Question 43 of 64

Time remaining: 17:45

What is the duty of a driver when re-filling the fuel tank with petrol or inflammable fuel?

- A. The driver may not cause or allow the engine to run whilst petrol or other inflammable fuel is being transferred to the fuel tank.
- B. He/she may only allow the engine to run if diesel is being transferred to the fuel tank.
- C. He/she may start the engine whilst petrol or other inflammable fuel is being transferred to check if the fuel tank is full.

◀ Previous

Review Questions

End Test

👍 Like

💬 Comment

Question 27 of 64

Time remaining: 18:28

When is overtaking prohibited?

- A. When approaching any place where passing could cause a hazard to traffic approaching from the opposite direction
- B. When passing a school
- C. When driving at night

◀ Previous

Review Questions

End Test

👍 Like

💬 Comment

Question 37 of 64

Time remaining: 17:59

How far may you park from the left edge of the roadway outside an urban area?

- A. Not more than 450 mm from the edge of the roadway.
- B. A vehicle may not be parked in the roadway unless in a parking area.
- C. Not more than 1 m from the edge of the roadway.

◀ Previous

Review Questions

End Test

Next

Question 34 of 64

Time remaining: 18:08

This sign shows the driver that ...

A. motor vehicles may not overtake goods vehicles.

B. a goods vehicle may not overtake any other vehicle.

C. there may not be any overtaking by goods vehicles.



◀ Previous

Review Questions

End Test

Next



Question 20 of 64

Time remaining: 18:51

When the driver sees this sign, he/she must ...

- A. turn left at the next road if he/she drives a delivery vehicle.
- B. turn left if he/she drives a goods vehicle.
- C. turn left at the stop sign.



◀ Previous

Review Questions

End Test

Next ▶

👍 Like

💬 Comment

Question 10 of 64

Time remaining: 19:16

Which statement is correct?

- A. A heavy motor vehicle may not be used on a public road if it is fitted with a spot lamp which can emit a beam of light that can be deflected in any direction.
- B. A heavy motor vehicle may be fitted with a spot lamp to warn others of road works.
- C. A heavy motor vehicle may be fitted with a spot lamp to add an extra beam when it is raining.

◀ Previous

Review Questions

End Test

👍 Like


💬 Comment

Question 41 of 64

Time remaining: 17:50

Before this road marking one would usually find the following sign ...

- A. a marked pedestrian crossing ahead.
- B. you must be on the lookout for cyclists.
- C. level crossing ahead.



◀ Previous

Review Questions

End Test

Next ▶





## Question: 10 of 30

How long is the grace period, after a vehicle's licence disc has expired, that it may still be operated on a public road?

### Options

21 days.

1 month.

There is no such thing as a grace period.

Finish Test

Next

## Question: 30 of 30

When the holder of a licence has changed their place of residence permanently, he or she must notify the registering authority in whose area they are ordinarily resident of the new residential and postal address within .....

### Options

21 days.

3 months.

14 days.

Finish Test

Next



## Question: 28 of 30

Where must the licence disc of a motor vehicle be displayed?

### Options

It does not have to be displayed and can be kept in the glove box of the vehicle.

Affixed to the lower left-hand corner on the inside of the windscreen.

Affixed to the upper left-hand corner on the inside of the windscreen.

Finish Test

Next



## Question: 20 of 30

When herding animals across a public road, a red warning flag during the day and a red warning light at night must be displayed ..... ahead of and behind the herd.

### Options

150m

10m

45m

Finish Test

Next