

Question 60 of 64

Time remaining: 21:38

What type of heavy motor vehicle or combinations of motor vehicles are restricted to travel at a maximum speed of 80 km/h?

A. Only vehicles carrying goods which belong to the government and traffic police

B. An articulated motor vehicle of which the gross combination mass of truck-tractor exceeds 9 000 kg.

C. Any heavy motor vehicle carrying goods

◀ Previous

Review Questions

End Test

Next ▶

Question 64 of 64

Time remaining: 19:55

You are caught in slow-moving heavy traffic in the right lane of a busy urban road. The car in front of you would like to turn right into a driveway. It has stopped and is waiting as oncoming traffic is heavy. What should you do?

- A. Switch on your left indicator and move into the left lane.
- B. Wait behind the car until you get an opportunity to pass on the left or to proceed.
- C. Hoot and pass to the left.

◀ Previous

Review Questions

End Test

Time remaining: 24:25

This road marking warns the road user that ...

- A. no overtaking is allowed.
- B. the road will split.
- C. the right lane may be used by vehicles in opposite directions at different times.



◀ Previous

Review Questions

End Test

Next

Time remaining: 23:26

When driving a motor vehicle, what is the minimum safe following distance to maintain when following another vehicle?

20157

- A. A driver may drive as close as possible so that overtaking will be easier.
- B. Five metres at 100 km/h.
- C. A distance determined by means of the two second rule.

◀ Previous

Review Questions

End Test

Next

Time remaining: 22:44

When is it permissible to allow a portion of the body to protrude beyond a vehicle?

- A. Only for the driver to give a hand signal.
- B. Only passengers may have a portion of their body protruding.
- C. When it is hot and the driver's window is open.

◀ Previous

Review Questions

End Test

Next ▶

Time remaining: 24:00

Your vehicle's headlights must be switched on ...

(i) at any time of the day when you cannot see persons and vehicles 150 m in front of you.

(ii) from sunset to sunrise.

(iii) when it rains and you cannot see vehicles 100 m in front of you.

SELECT THE CORRECT COMBINATION.

2024

A. Only (i) and (ii) are correct

B. Only (ii) is correct

C. All of the above are correct

◀ Previous

Review Questions

End Test

Next ▶

Time remaining: 23:39

The use of a temporary sign implies that for some reason ...

253

- A. traffic has to move slowly.
- B. circumstances on the roadway are not normal.
- C. the rules of the road do not apply.

◀ Previous

Review Questions

End Test

Next

Time remaining: 22:49

Which statement is true?

291/45

A. A person may only drive a motor vehicle in such a way that it causes excessive noise in an urban area.

B. A person may only drive a motor vehicle in such a way that it causes excessive noise outside a built up area.

C. No person shall operate a vehicle on a public road in such a manner as to cause excessive noise.

◀ Previous

Review Questions

End Test

Next ▶

Time remaining: 22:10

When approaching this sign, the driver must ...

- A. know that he is warned of a stop ahead.
- B. stop behind the stop line and give right of way to vehicles from the right.
- C. yield and carry on when safe to do so.



◀ Previous

Review Questions

End Test

Next ▶

Time remaining: 26:09

When the motor vehicle is stationary, what must the driver do to ensure that the motor vehicle does not move?

2024

- A. The wheels must be turned toward the kerb/sidewalk.
- B. The parking brake must be securely applied.
- C. The gear lever must be left in the neutral position.

◀ Previous

Review Questions

End Test

Time remaining: 24:32

This road marking indicates to drivers that ...

- A. you may use this lane if you want to pick up people.
- B. this lane is for the exclusive use of buses.
- C. any vehicle dropping or picking up passengers may use this lane.



◀ Previous

Review Questions

End Test

Next ▶

Time remaining: 21:44

Where may you legally stop with your vehicle?

- A. 5 m from a pedestrian crossing.
- B. 4 m from a tunnel.
- C. 6 m from a railway crossing reserve.

◀ Previous

Review Questions

End Test

Next ▶

Time remaining: 22:16

The lights of your vehicle parked on a public road between sunset and sunrise need not be kept lighted when the vehicle is parked ...

- (i) 10 m from a lighted street lamp.
- (ii) next to the roadway of the road.
- (iii) in a demarcated parking area.

SELECT THE CORRECT COMBINATION

20245

- A. Only (i) and (iii) are correct
- B. All of the above are correct
- C. Only (ii) and (iii) are correct

◀ Previous

Review Questions

End Test

Next ▶

Time remaining: 22:26

The following vehicles are not allowed on a freeway?

QW172

- A. A vehicle driven by a learner driver.
- B. A tractor, except when it is used in connection with construction or maintenance of the freeway.
- C. A vehicle used for the conveyance of school children.

◀ Previous

Review Questions

End Test

Next ▶

Question 20 of 64

Time remaining: 18:51

When the driver sees this sign, he/she must ...

A. turn left at the next road if he/she drives a delivery vehicle.

B. turn left if he/she drives a goods vehicle.

C. turn left at the stop sign.



Time remaining: 24:41

What is the requirement for exhaust silencers?

- A. The driver must ensure that no gas or smoke leaks into the cab or passenger compartment of the vehicle.
- B. Exhaust silencers must be professionally checked once a year.
- C. The exhaust silencer must not allow the exhaust gas to be emitted to the rear of the vehicle.

◀ Previous

Review Questions

End Test

Whilst the vehicle is in motion a driver may ...

A. not hold a cell phone with any other part of the body.

B. type an SMS.

C. hold a cell phone provided the driver keeps at least one hand on the steering wheel.

◀ Previous

Review Questions

End Test

Next ▶

Time remaining: 24:29

This road marking indicates to drivers to ...

- A. look out for school kids.
- B. yield to all users of the road, possibly trains too.
- C. stop.



◀ Previous

Review Questions


End Test

Next ▶

Time remaining: 17:50

Before this road marking one would usually find the following sign ...

- A. a marked pedestrian crossing ahead.
- B. you must be on the lookout for cyclists.
- C. level crossing ahead.



Question 45 of 64

Time remaining: 17:40

What type of brakes must be fitted on a heavy motor vehicle?

- A. Service brakes, parking brakes and emergency brakes.
- B. Parking brake only.
- C. Service brakes only.

ning: 39:16

Trailers of which the gross vehicle mass does not exceed 10000 kg ...

20142

- A. are not required to fit yellow reflective material to the vehicle.
- B. shall be fitted with yellow reflective material to the sides of the vehicle only.
- C. shall be fitted with yellow reflective material to the sides and the rear of the vehicle.

Review Questions

End Test

Next ▶

Time remaining: 22:58

When control number 9 is used, the distance it takes the driver of a motor vehicle to stop it is ...

- (i) longer on a wet road than on a dry road.
- (ii) longer if the vehicle is travelling at a higher speed.
- (iii) longer if the vehicle is loaded.

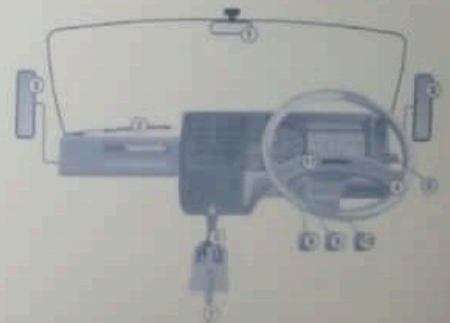
SELECT THE CORRECT COMBINATION

2018

A. None of the above are correct

B. All of the above are correct

C. Only (i) is correct



◀ Previous

Review Questions

End Test

Next ▶

Time remaining: 22:35

What is the purpose of an accelerator?

2071

- A. it is used to turn a vehicle in an emergency.
- B. It is used to stop a vehicle.
- C. It is used to increase or decrease the speed of a vehicle.

◀ Previous

Review Questions

End Test

Next ▶

Time remaining: 22:39

Control no. 6 is the ...

7C58

- A. gear lever.
- B. parking brake.
- C. clutch pedal.



◀ Previous

Review Questions

End Test

Next ▶

Question 61 of 64

Time remaining: 20:32


This sign indicates to a driver that a high speed exit is ... ahead.

2527

A. 1 km

B. 10 meters

C. 100 meters



◀ Previous

Review Questions

End Test

Next ▶

Question 53 of 64

Time remaining: 17:18

This road marking tells you that ...

A. you may never park next to the road indicated by the black arrow.

B. you may not stop next to the road over there.

C. the road is under construction.



Question 54 of 64

Time remaining: 17:16

What is the requirement regarding noise caused by a heavy motor vehicle?

0143

A. A person may operate a vehicle causing excessive noise, but only at night.

B. No person shall operate a vehicle on a public road in such a manner that it causes excessive noise.

C. A person may operate a vehicle causing excessive noise outside town.

Which statement is correct?

24208

- A. A heavy motor vehicle may be fitted with a spot lamp to add an extra beam when it is raining.
- B. A heavy motor vehicle may be fitted with a spot lamp to warn others of road works.
- C. A heavy motor vehicle may not be used on a public road if it is fitted with a spot lamp which can emit a beam of light that can be deflected in any direction.

◀ Previous

Review Questions

End Test

Next

Question 56 of 64

Time remaining: 17:11

The following control is used to change the direction of the vehicle:

A. 6

B. 4

C. 5



Question 43 of 64

Time remaining: 17:45

What is the duty of a driver when re-filling the fuel tank with petrol or inflammable fuel?

20176

- A. The driver may not cause or allow the engine to run whilst petrol or other inflammable fuel is being transferred to the fuel tank.
- B. He/she may only allow the engine to run if diesel is being transferred to the fuel tank.
- C. He/she may start the engine whilst petrol or other inflammable fuel is being transferred to check if the fuel tank is full.

Question 6 of 64

Time remaining: 19:28

When driving a motor vehicle, what is the minimum safe following distance to maintain when following another vehicle?

- A. A distance determined by means of the two second rule.
- B. A driver may drive as close as possible so that overtaking will be easier.
- C. Five metres at 100 km/h.

Question 41 of 64


Time remaining: 17:50

Before this road marking one would usually find the following sign ...

A. a marked pedestrian crossing ahead.

B. you must be on the lookout for cyclists.

C. level crossing ahead.



Question 23 of 64

remaining: 18:41

What should a driver consider when following another vehicle?

- A. The driver should follow at a safe distance and be able to stop the vehicle safely in an emergency situation or should the vehicle in front slow down or stop.
- B. The driver should be able to see the rear tyres of the vehicle in front.
- C. The driver should follow another vehicle keeping three car lengths behind.

Question 60 of 64

Time remaining: 17:00

The appropriate reaction to this sign is to ...

042

- A. stop, as the road is closed.
- B. turn around as the road ends.
- C. slow down and prepare to stop if necessary.



Time remaining: 17:09

You may not ...

- (i) run the engine of your vehicle unattended.
- (ii) use your vehicle without a cap on the fuel tank.
- (iii) spin the wheels of your vehicle when pulling off.

SELECT THE CORRECT COMBINATION

20134

A. Only (i) and (ii) are not allowed

B. Only (ii) is not allowed

C. None of the above are allowed

Question 12 of 64


Time remaining: 19:12

When approaching this sign, the driver knows that ...

A. a lane is added to the left of a two-way roadway.

B. the people driving on the left side of the road must turn left.

C. vehicles may be overtaken on the left side from there on.



Question 51 of 64

Time remaining: 17:24

This sign indicates to the driver that there ...

7814

A. are obstructions to the road 1 km ahead that affect the traffic movement.

B. are obstructions in the road for 1 km.

C. are road works within 1 km.



Question 9 of 64

Time remaining: 19:19

The use of a temporary sign implies that for some reason ...

A. circumstances on the roadway are not normal.

B. traffic has to move slowly.

C. the rules of the road do not apply.

Question 63 of 64

Time remaining: 16:52

This sign indicates to a driver that a high speed exit is ... ahead.

327

A. 1 km

B. 100 meters

C. 10 meters



Question 27 of 64

Time remaining: 18:28

When is overtaking prohibited?

12/19

A. When approaching any place where passing could cause a hazard to traffic approaching from the opposite direction.

B. When passing a school.

C. When driving at night.

49.55

What type of heavy motor vehicle or combinations of motor vehicles are restricted to travel at a maximum speed of 80 km/h?

A. Any heavy motor vehicle carrying goods

B. Only vehicles carrying goods which belong to the government and traffic police

C. An articulated motor vehicle of which the gross combination mass of truck-tractor exceeds 9 000 kg.

Question 13 of 64

Time remaining: 19:09

This sign shows the driver of the vehicle that ...

A. at the next intersection the driver must turn right.

B. the road turns to the right only.

C. there is an alternative route at the next intersection to the right.



End Test

Next

Question 62 of 64

Time remaining: 16:55

When seeing this sign the driver knows that he/she must ..

25106

- A. proceed on the left side of the road.
- B. keep in the left lane only.**
- C. pass to the left of the obstacle on which the sign has been placed.



Question 38 of 64

Time remaining: 17:57

This sign shows to riders of motor cycles that ...

3301

- A. they have preference in that part of the road.
- B. they must use that part of the road.**
- C. there is parking for motor cycles there.



Question 10 of 64

Time remaining: 19:16

Which statement is correct?

- A. A heavy motor vehicle may not be used on a public road if it is fitted with a spot lamp which can emit a beam of light that can be deflected in any direction.
- B. A heavy motor vehicle may be fitted with a spot lamp to warn others of road works.
- C. A heavy motor vehicle may be fitted with a spot lamp to add an extra beam when it is raining.

Question 61 of 64

Time remaining: 16:57

Trailers of which the gross vehicle mass does not exceed 10000 kg ...

Q1342

- A. shall be fitted with yellow reflective material to the sides and the rear of the vehicle.
- B. shall be fitted with yellow reflective material to the sides of the vehicle only.
- C. are not required to fit yellow reflective material to the vehicle.

Question 34 of 64

Time remaining: 18:08

This sign shows the driver that ...

0241

A. motor vehicles may not overtake goods vehicles.

B. a goods vehicle may not overtake any other vehicle.

C. there may not be any overtaking by goods vehicles.



Question 21 of 64

Time remaining: 18:47

you only have a learner's licence for a heavy motor vehicle, ...
(i) then there must be someone with you in the vehicle with the same driving licence.

(ii) you are not allowed to drive on a freeway.

(iii) no passengers are allowed with you in the vehicle.

SELECT THE CORRECT COMBINATION

A. All the above are correct

B. Only (i) is correct

C. Only (i) and (iii) are correct

Next ▶

Question 46 of 64

Time remaining: 17:37

Which of the following statements is correct? A silencer ...

OR154

A. need not be fitted.

B. with a small hole is acceptable.

C. must be fitted to a vehicle to restrict engine noise to acceptable levels.

Question 48 of 64

Time remaining: 17:32

This type of sign is known as ...

1538

A. a regulatory sign.

B. a warning sign.

C. an information sign.



Question 32 of 64

Time remaining: 18:13

The following control is used to select the appropriate gear of the vehicle:

2084

A. 8

B. 7

C. 6



Question 49 of 64

Time remaining: 17:30

What is the function of a clutch?

- A. It is used to disconnect the engine from the transmission.
- B. It is used to reduce the speed of a vehicle.
- C. It is used to freewheel down a hill.

Question 39 of 64

Time remaining: 17:55


This road marking warns you that ...

079

A. you will have to change lanes ahead.

B. a railway line will be crossing the road at the same level.

C. you may not enter this parking area.



Question 37 of 64

Time remaining: 17:59

How far may you park from the left edge of the roadway outside an urban area?

003

- A. Not more than 450 mm from the edge of the roadway.
- B. A vehicle may not be parked in the roadway unless in a parking area.
- C. Not more than 1 m from the edge of the roadway.

heavy motor vehicle must be equipped with an efficient exhaust silencer, which

A. does not have to be maintained, as long as it does not make a noise.

B. must be so maintained that it does not cause a vibration in the cab.

C. must be so maintained that the exhaust gas or smoke does not leak into the driving cab or passengers compartment of the vehicle.

Question 26 of 64

Time remaining: 18:31

temporary sign ...

- A. has the same legal significance as a permanent sign.
- B. need not be taken seriously at all times of the day.
- C. is of less consequence to road users than a permanent sign.

Question 52 of 64


Time remaining: 17:21

What will this road marking indicate to the driver?

A. No overtaking is permitted.

B. Lanes are reducing from the right.

C. The vehicle in the right hand lane has right of way.



Question 22 of 64

Time remaining: 18:44

When moving off from a stationary position at the side of the road, what is the responsibility of the driver?

- A. The driver must ensure that it is safe and that he/she will not interfere with traffic approaching from any direction.
- B. The driver must join other traffic as quickly as possible.
- C. The driver must indicate his/her intention and then move off.

Next ►

Question 18 of 64

Time remaining: 18:56

This signal indicates that ...

23348

A. this lane is for fast moving traffic only.

B. you may drive there.

C. this lane is for slow moving traffic only.




Question 53 of 64

Time remaining: 17:18

This road marking tells you that ...

- A. you may never park next to the road indicated by the black arrow.
- B. you may not stop next to the road over there.
- C. the road is under construction.



Question 55 of 64

Time remaining: 17:13

To select a gear, you must use numbers ...

A. 6 and 8

B. 5 and 8

C. 7 and 9



Question 8 of 64

Time remaining: 19:22

Head lamps, rear lamps and number plate lights must be switched on ...

A. between sunset and sunrise.

B. during peak hours.

C. at all times.

Question 59 of 64

Time remaining: 17:04

When the robot is red and the red arrow flashes to the left as indicated in the picture, it shows you that ...

A. you don't have to stop and you may just turn left.

B. you must stop behind the line and proceed left if it is safe to do so even if the red light is on.

C. you must slow down and then turn left without yielding to other traffic.



Question 27 of 64

Time remaining: 18:28

When is overtaking prohibited?

- A. When approaching any place where passing could cause a hazard to traffic approaching from the opposite direction.
- B. When passing a school.
- C. When driving at night.

Question 21 of 64

Time remaining: 18:47

If you only have a learner's licence for a heavy motor vehicle, ...
(i) then there must be someone with you in the vehicle with the same driving licence.

(ii) you are not allowed to drive on a freeway.

(iii) no passengers are allowed with you in the vehicle.

SELECT THE CORRECT COMBINATION

A. All the above are correct

B. Only (i) is correct

C. Only (i) and (iii) are correct

Question 44 of 64

Time remaining: 17:42

This sign indicates ...

A. how much toll you will have to pay.

B. which way all vehicles have to go.

C. a toll road and an alternative for a toll road.

N3  Harrismith 10
R103  Harrismith 12

Question 6 of 64

Time remaining: 19:28

When driving a motor vehicle, what is the minimum safe following distance to maintain when following another vehicle?

- A. A distance determined by means of the two second rule.
- B. A driver may drive as close as possible so that overtaking will be easier.
- C. Five metres at 100 km/h.

Question 22 of 64

Time remaining: 18:44

When moving off from a stationary position at the side of the road, what is the responsibility of the driver?

- A. The driver must ensure that it is safe and that he/she will not interfere with traffic approaching from any direction.
- B. The driver must join other traffic as quickly as possible.
- C. The driver must indicate his/her intention and then move off.

Question 56 of 64

Time remaining: 17:11

The following control is used to change the direction of the vehicle:

A. 6

B. 4

C. 5



Question 46 of 64

Time remaining: 17:37

Which of the following statements is correct? A silencer ...

- A. need not be fitted.
- B. with a small hole is acceptable.
- C. must be fitted to a vehicle to restrict engine noise to acceptable levels.

Question 10 of 64

Time remaining: 19:18

Which statement is correct?

- A. A heavy motor vehicle may not be used on a public road if it is fitted with a spot lamp which can emit a beam of light that can be deflected in any direction.
- B. A heavy motor vehicle may be fitted with a spot lamp to warn others of road works.
- C. A heavy motor vehicle may be fitted with a spot lamp to add an extra beam when it is raining.

Question 54 of 64

Time remaining: 17:16

What is the requirement regarding noise caused by a heavy motor vehicle?

- A. A person may operate a vehicle causing excessive noise, but only at night.
- B. No person shall operate a vehicle on a public road in such a manner that it causes excessive noise.
- C. A person may operate a vehicle causing excessive noise outside town.

Question 33 of 64

Time remaining: 18:10

This sign shows you that ...

2/3/26

A. the taking of photographs is not permitted.

B. there is a photographic studio.

C. there is a camera monitoring the intersection at the traffic light.



Question 43 of 64

Time remaining: 17:45

What is the duty of a driver when re-filling the fuel tank with petrol or inflammable fuel?

DRIVE

- A. The driver may not cause or allow the engine to run whilst petrol or other inflammable fuel is being transferred to the fuel tank.
- B. He/she may only allow the engine to run if diesel is being transferred to the fuel tank.
- C. He/she may start the engine whilst petrol or other inflammable fuel is being transferred to check if the fuel tank is full.

Question 5 of 64

Time remaining: 19:30

Where may you legally stop with your vehicle?

- A. 4 m from a tunnel.
- B. 6 m from a railway crossing reserve.
- C. 5 m from a pedestrian crossing.

Question 47 of 64

Time remaining: 17:35

This sign indicates ...

2522

A. that all traffic must turn right.

B. the presence of a bridge.

C. the direction to a freeway.



Time remaining: 22:58

When control number 9 is used, the distance it takes the driver of a motor vehicle to stop it is ...

- (i) longer on a wet road than on a dry road.
- (ii) longer if the vehicle is travelling at a higher speed.
- (iii) longer if the vehicle is loaded.

SELECT THE CORRECT COMBINATION

2018

A. None of the above are correct

B. All of the above are correct

C. Only (i) is correct



◀ Previous

Review Questions

End Test

Next ▶

Time remaining: 21:49

Whilst the vehicle is in motion a driver may ...

A. not hold a cell phone with any other part of the body.

B. type an SMS.

C. hold a cell phone provided the driver keeps at least one hand on the steering wheel.

◀ Previous

Review Questions

End Test

Next ▶

Time remaining: 22:31

Which is the correct answer considering this sign?

25342

A. When the red man is glowing it means that pedestrians have priority.

B. When the green man is glowing it means that pedestrians should run across the street as fast as they can.

C. When the green man is glowing, pedestrians may walk across and when the red light is glowing, pedestrians may not walk across.



◀ Previous

Review Questions

End Test

Next

Time remaining: 21:59

When may you stop in front of this sign?

- A. Only when you want to look at the scenery.
- B. Only when picking up passengers.
- C. Never.



◀ Previous

Review Questions

End Test

Next ▶

Question 50 of 64

Time remaining: 17:26

When a vehicle is travelling in the right hand lane, as shown in this sign, the driver must ...

2513

A. drive faster than or drive 60 km/h.

B. drive slower than 60 km/h.

C. overtake vehicles in the right lane that are travelling slower than 60 km/h.



Time remaining: 23:39

The use of a temporary sign implies that for some reason ...

- A. traffic has to move slowly.
- B. circumstances on the roadway are not normal.
- C. the rules of the road do not apply.

◀ Previous

Review Questions

End Test

Next

Time remaining: 22:16

The lights of your vehicle parked on a public road between sunset and sunrise need not be kept lighted when the vehicle is parked ...

- (i) 10 m from a lighted street lamp.
- (ii) next to the roadway of the road.
- (iii) in a demarcated parking area.

SELECT THE CORRECT COMBINATION

- A. Only (i) and (iii) are correct
- B. All of the above are correct**
- C. Only (ii) and (iii) are correct

◀ Previous

Review Questions

End Test

Next ▶

Question 64 of 64

Time remaining: 16:49

When is it permissible to park in a "no stopping" area?

03/18

- A. Parking is permissible, however, only stopping is not permissible.
- B. Only if no other parking area is available.
- C. It is not permissible to park where stopping is not permitted.

Question 16 of 64

Time remaining: 19:01

When control number 9 is used, the distance it takes the driver of a motor vehicle to stop it is ...

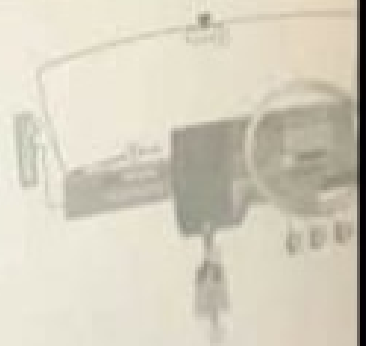
- (i) longer on a wet road than on a dry road.
- (ii) longer if the vehicle is travelling at a higher speed.
- (iii) longer if the vehicle is loaded.

SELECT THE CORRECT COMBINATION

A. All of the above are correct

B. None of the above are correct

C. Only (i) is correct



End Test

Next

Time remaining: 18:25

Where a goods vehicle is temporarily stationary on the roadway of a public road, it is required that the driver must ...

- A. display one emergency warning sign in the front and one at the back of the vehicle.
- B. put out a red fire extinguisher to warn traffic.
- C. display at least one emergency warning sign at the back of the vehicle.

Question 7 of 64

Time remaining: 19:24

The driver of a vehicle shall not cross a public road unless...

- A. he/she looks and signals his/her intentions and then moves onto the roadway.
- B. the road is clear of moving traffic for a sufficient distance to allow him / her to cross the road without obstructing or endangering any traffic.
- C. he/she looks into the rear view mirror, engages gears and accelerates, so that he/she can enter the road.

Question 17 of 64

Time remaining: 18:59

The lights of your vehicle parked on a public road between sunset and sunrise need not be kept lighted when the vehicle is parked ...

- (i) 10 m from a lighted street lamp.
- (ii) next to the roadway of the road.
- (iii) in a demarcated parking area.

SELECT THE CORRECT COMBINATION

20246

- A. Only (i) and (iii) are correct
- B. Only (ii) and (iii) are correct
- C. All of the above are correct**

Next

Question 22 of 64

remaining: 18:44

When moving off from a stationary position at the side of the road, what is the responsibility of the driver?

- A. The driver must ensure that it is safe and that he/she will not interfere with traffic approaching from any direction.
- B. The driver must join other traffic as quickly as possible.
- C. The driver must indicate his/her intention and then move off.

Question 30 of 64

Time remaining: 18:19

Which one of the following statements is correct?

- A. Pedal cycles are not permitted on a freeway.
- B. Racing cycles may be ridden on a freeway during the day only.
- C. Pedal cycles may only be ridden on the shoulder of the freeway.

Question 14 of 64

remaining: 19:06

In which side of the roadway may you drive if the roadway is wide enough without endangering other traffic?

A. A driver shall drive on the left side of the roadway.

B. A driver may encroach or drive on the right-hand of a roadway if the car in front is driving slowly.

C. A driver may drive on the right-hand side provided there is no traffic.

Question 23 of 64

Time remaining: 18:41

What should a driver consider when following another vehicle?

- A. The driver should follow at a safe distance and be able to stop the vehicle safely in an emergency situation or should the vehicle in front slow down or stop.
- B. The driver should be able to see the rear tyres of the vehicle in front.
- C. The driver should follow another vehicle keeping three car lengths behind.

Question 30 of 64

Time remaining: 18:19

Which one of the following statements is correct?

- A. Pedal cycles are not permitted on a freeway.
- B. Racing cycles may be ridden on a freeway during the day only.
- C. Pedal cycles may only be ridden on the shoulder of the freeway.

Question 15 of 64

Time remaining: 19:04

In order to draw attention, the background of temporary signs is usually ...

A. white.

B. yellow.

C. red.

Question 27 of 64

Time remaining: 18:28

When is overtaking prohibited?

10259

- A. When approaching any place where passing could cause a hazard to traffic approaching from the opposite direction.
- B. When passing a school.
- C. When driving at night.

Question 39 of 64

Time remaining: 17:55

This road marking warns you that ...

A. you will have to change lanes ahead.

B. a railway line will be crossing the road at the same level.

C. you may not enter this parking area.



Question 51 of 64

Time remaining: 17:24

This sign indicates to the driver that there ...

2014

A. are obstructions to the road 1 km ahead that affect the traffic movement.

B. are obstructions in the road for 1 km.

C. are road works within 1 km.



Question 21 of 64

Time remaining: 18:47

If you only have a learner's licence for a heavy motor vehicle, ...
(i) then there must be someone with you in the vehicle with the same driving licence.

(ii) you are not allowed to drive on a freeway.

(iii) no passengers are allowed with you in the vehicle.

SELECT THE CORRECT COMBINATION

A. All the above are correct

B. Only (i) is correct

C. Only (i) and (iii) are correct

Question 20 of 64

Time remaining: 18:51

When the driver sees this sign, he/she must ...

- A. turn left at the next road if he/she drives a delivery vehicle.
- B. turn left if he/she drives a goods vehicle.
- C. turn left at the stop sign.



Question 57 of 64

Time remaining: 17:09

You may not ...

- (i) run the engine of your vehicle unattended.
- (ii) use your vehicle without a cap on the fuel tank.
- (iii) spin the wheels of your vehicle when pulling off.

SELECT THE CORRECT COMBINATION

09/14

A. Only (i) and (ii) are not allowed

B. Only (ii) is not allowed

C. None of the above are allowed